


**General Instructions:**

- (i). All questions are compulsory.
- (ii). This question paper contains **30** questions divided into four Sections A, B, C and D.
- (iii). **Section A** comprises of 6 questions of **1 mark** each. **Section B** comprises of 6 questions of **2 marks** each. **Section C** comprises of 10 questions of **3 marks** each and **Section D** comprises of 8 questions of **4 marks** each.
- (iv). Use of Calculators is not permitted

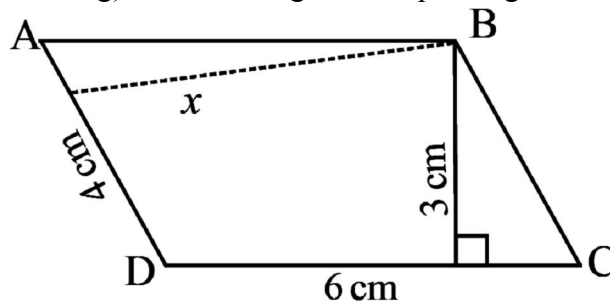
**SECTION – A**

1. Express 729 as a power 3.
2. Express 648 as a product of powers of prime factors
3. If  $p = -2$ , find the value of  $-3p^2 + 4p + 7$
4. What is the circumference of a circle of diameter 10 cm (Take  $\pi = 3.14$ )?
5. What cross-sections do you get when you give a vertical cut to the brick?
6. Find the number of lines of symmetry of the given figure:



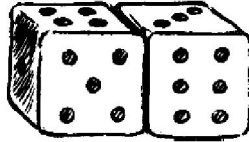
**SECTION – B**

7. The two sides of the parallelogram ABCD are 6 cm and 4 cm. The height corresponding to the base CD is 3 cm (see below Fig). Find the height corresponding to the base AD.



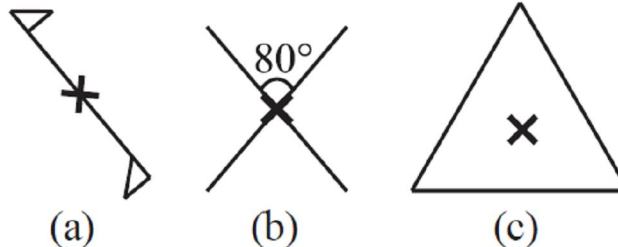
8. Using laws of exponents, simplify and write the answer in exponential form:  $(2^{20} \div 2^{15}) \times 2^3$

9. The number of illiterate persons in a country decreased from 150 lakhs to 100 lakhs in 10 years. What is the percentage of decrease?
10. State the number of lines of symmetry for the following figures:  
(a) A parallelogram (c) A regular hexagon
11. What cross-sections do you get when you give a (i) vertical cut (ii) horizontal cut to the following solids? (a) A circular pipe (b) An ice cream cone
12. Two dice are placed side by side as shown in below figure. What the total would be on the face opposite to (a) 5 + 6 (b) 4 + 3



### SECTION – C

13. Selling price of a toy car is Rs 540. If the profit made by shopkeeper is 20%, what is the cost price of this toy?
14. Simplify:  $\frac{25 \times 5^2 \times t^8}{10^3 \times t^4}$
15. Find any three rational numbers between  $\frac{1}{4}$  and  $\frac{1}{2}$
16. A circular flower bed is surrounded by a path 4 m wide. The diameter of the flower bed is 66 m. What is the area of this path? ( $\pi = 3.14$ )
17. Give the order of rotational symmetry for each figure:



18. Add:  
(i)  $14x + 10y - 12xy - 13$ ,  $18 - 7x - 10y + 8xy$ ,  $4xy$   
(ii)  $3p^2q^2 - 4pq + 5$ ,  $-10p^2q^2$ ,  $15 + 9pq + 7p^2q^2$
19. If  $a = 2$ ,  $b = -2$ , find the value of: (i)  $a^2 + ab + b^2$  (iii)  $a^2 - b^2$ .
20. Construct  $\triangle LMN$ , right-angled at M, given that  $LN = 5$  cm and  $MN = 3$  cm.
21. Let  $l$  be a line and  $P$  be a point not on  $l$ . Through  $P$ , draw a line  $m$  parallel to  $l$ . Now join  $P$  to any point  $Q$  on  $l$ . Choose any other point  $R$  on  $m$ . Through  $R$ , draw a line parallel to  $PQ$ . Let this meet  $l$  at  $S$ . What shape do the two sets of parallel lines enclose?
22. A verandah of width 2.25 m is constructed all along outside a room which is 5.5 m long and 4 m wide. Find: (i) the area of the verandah.  
(ii) the cost of cementing the floor of the verandah at the rate of Rs 200 per  $m^2$ .

**SECTION – D**

23. Manoj donates Rs. 2000 to a school, the interest on which is to be used for awarding 5 scholarships of equal value every year. If the donator earns an interest of 10% per annum, find the value of each scholarship. What value depicted from this?
24. Find: (i)  $\frac{-8}{19} + \frac{(-2)}{57}$  (ii)  $\frac{-6}{13} - \frac{-7}{15}$
25. Express the number appearing in the following statements in standard form.
- (a) In a galaxy there are on an average 100,000,000,000 stars.
  - (b) The universe is estimated to be about 12,000,000,000 years old.
  - (c) The distance of the Sun from the centre of the Milky Way Galaxy is estimated to be 300,000,000,000,000,000 m.
  - (d) The earth has 1,353,000,000 cubic km of sea water.
26. From the sum of  $2y^2 + 3yz$ ,  $-y^2 - yz - z^2$  and  $yz + 2z^2$ , subtract the sum of  $3y^2 - z^2$  and  $-y^2 + yz + z^2$ .
27. Two cross roads, each of width 10 m, cut at right angles through the centre of a rectangular park of length 700 m and breadth 300 m and parallel to its sides. Find the area of the roads. Also find the area of the park excluding cross roads. Give the answer in hectares.
28. Construct  $\Delta PQR$  if  $PQ = 5$  cm,  $m\angle PQR = 105^\circ$  and  $m\angle QRP = 40^\circ$ .
29. Three cubes each with 2 cm edge are placed side by side to form a cuboid. Make an oblique sketch and find its length, breadth and height.
30. Draw, wherever possible, a rough sketch of
- (i) a triangle with both line and rotational symmetries of order more than 1.
  - (ii) a triangle with only line symmetry and no rotational symmetry of order more than 1.

